

BSCCS2001: Graded Assignment with Solutions  
Week 4

1. Consider the relations shown in Figure 1. [MSQ: 2 points]

CAR		
NAME	MADE	COST
CAR-A	COM-X	200
CAR-B	COM-X	100
CAR-A	COM-Z	300
CAR-B	COM-Y	300
CAR-B	COM-Z	400
CAR-C	COM-X	100
CAR-D	COM-Y	200
CAR-D	COM-X	300

COSTING	
MADE	COST
COM-X	100
COM-Z	400

Figure 1: Relations **CAR** and **COSTING**

Which car name(s) will be displayed by the operation  $CAR \div COSTING$ ?

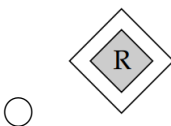
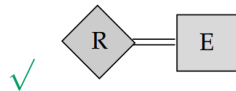
- ☐ CAR-A  
☒ CAR-B  
☐ CAR-D  
☐ CAR-A, CAR-B

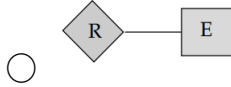
**Solution:** The relation returned by the division operation must have attributes that are in **CAR** but not in **COSTING**. Thus, the returned relation will have only one attribute *NAME*.

The returned relation must have those tuples from relation **CAR** which are associated to every tuple from **COSTING**. Thus, in this case it will be **CAR-B**.

2. Which of the following symbols is used in the ER-diagrams to represent “total participation of an entity set in a relationship”?

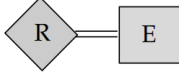
[MCQ: 1 point]





☐ None of the above

**Solution:**



represents total participation of an entity set in a relationship.



represents identifying relationship set for weak entity.



represents partial participation of an entity set in a relationship.

3. Choose the relational algebra expression that is equivalent to the following tuple calculus expression: [MCQ: 1 point]

$\{t \mid t \in r \wedge (t[A] = 50 \wedge t[B] = 90)\}$

- ☐  $\sigma_{(A=50 \vee B=90)}(r)$
- ☐  $\sigma_{(A=50)}(r) \cup \sigma_{(B=90)}(r)$
- ☒  $\sigma_{(A=50)}(r) \cap \sigma_{(B=90)}(r)$
- ☐  $\sigma_{(A=50)}(r) - \sigma_{(B=90)}(r)$

**Solution:** Select Operator ( $\sigma$ ) selects those rows or tuples from a relation that satisfies the selection condition.

Option 1: It will fetch the tuples having  $A = 50$  or  $B = 90$ .

Option 2: It calculates union of tables having  $A = 50$  and  $B = 90$  separately.

Option 3: It is valid as it calculates the intersection of tables having  $A = 50$  and  $B = 90$  separately.

Option 4: The MINUS operator is used to subtract the result set obtained by  $\sigma_{(A=50)}(r)$  from the result set obtained by  $\sigma_{(B=90)}(r)$ , thus it will return only those rows which have tuple  $A = 50$  and not those rows which are common to both  $A = 50$  and  $B = 90$ .

4. A bank consists of several **Person** entities. The **Person** entities may have two special types: **Employee** and **AccountHolder**. However, there is a possibility that some **Person** entities are neither an **Employee** nor an **AccountHolder** (like a visitor at the bank). Again, some **Person** entities can be of both **Employee** and **AccountHolder** types. [MCQ: 2 points]

Identify the constraints on specialization with respect to the above scenario.

- ☐ Disjoint and partial
- ☒ Overlapping and partial
- ☐ Disjoint and total
- ☐ Overlapping and total

**Solution:**

- As a **Person** can be an **Employee** or an **AccountHolder** or just a **Person** (like a visitor at the bank), it is partial specialization.
- As a **Person** can be both **Employee** and **AccountHolder**, it is overlapping specialization.

5. Consider the E-R diagram given in Figure 2.

[MSQ: 1 point]

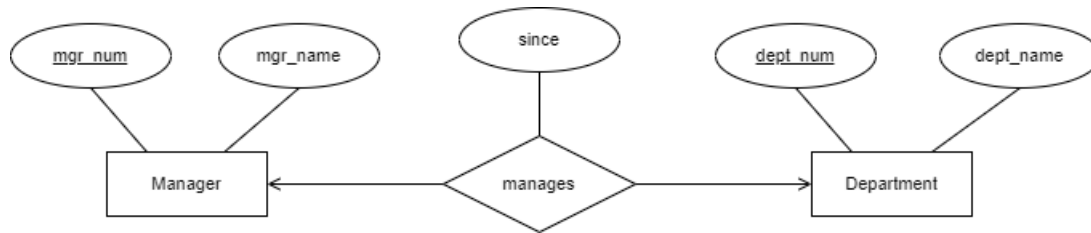


Figure 2: E-R diagram

Identify the option(s) that correctly represent(s) the corresponding tables for the given E-R diagram.

- ☐ **Manager**(mgr\_num, mgr\_name)  
**manages**(mgr\_num, dept\_name, since)  
**Department**(dept\_num, dept\_name)
- ✓ **Manager**(mgr\_num, mgr\_name)  
**Department**(dept\_num, mgr\_num, dept\_name, since)
- ✓ **Manager**(mgr\_num, dept\_num, mgr\_name, since)  
**Department**(dept\_num, dept\_name)
- ☐ **Manager**(mgr\_num, dept\_num, mgr\_name, since)  
**Department**(dept\_num, dept\_name)

**Solution:** manages is a one-to-one relationship set between **Manager** and **Department**.

The E-R diagram can be mapped to the tables using either of the following:

- **Manager**(mgr\_num, mgr\_name)
- **Department**(dept\_num, mgr\_num, dept\_name, since)

or

- **Manager**(mgr\_num, dept\_num, mgr\_name, since)
- **Department**(dept\_num, dept\_name)

6. Consider the relations below:

[ MSQ: 3 points]

- **doctor**(*doc\_id*, *doc\_name*, *specialization*)
- **patient**(*patient\_num*, *patient\_name*)
- **operationRoster**(*doc\_id*, *patient\_num*, *operation\_cost*)

Identify the appropriate expression(s) to find all the distinct names of the patients operated either by “Dr. Nath” or by “Dr. Joseph”.

- ☒  $\Pi_{patient\_name} (patient \bowtie \Pi_{patient\_num} (\sigma_{doc\_name="Dr. Nath" \vee doc\_name="Dr. Joseph"} (doctor \bowtie operationRoster)))$
- ☐  $\Pi_{patient\_name} (patient \bowtie \Pi_{patient\_num} (\sigma_{doc\_name="Dr. Nath" \vee doc\_name="Dr. Joseph"} (doctor \times operationRoster)))$
- ☒  $\Pi_{patient\_name} (\sigma_{doc\_name="Dr. Nath"} ((patient \bowtie (doctor \bowtie operationRoster)))) \cup \Pi_{patient\_name} (\sigma_{doc\_name="Dr. Joseph"} ((patient \bowtie (doctor \bowtie operationRoster))))$
- ☐  $\Pi_{patient\_name} (patient \bowtie \Pi_{patient\_num} (\sigma_{doc\_name="Dr. Nath" \vee doc\_name="Dr. Joseph" \vee doctor.doc\_id=operationRoster.doc\_id} (doctor \times operationRoster)))$

**Solution:** Option-1 does the following:

1. Apply natural join between **doctor** and **operationRoster**, thus, combines the tuples based on the equality on *doc\_id* on both the relations.
2. Then, apply select operation to extract the tuples having *doc\_name* as either “Dr. Nath” or “Dr. Joseph”.
3. Then, project *patient\_num* from the selected tuples.
4. Again, perform natural join between selected *patient\_num* tuples with **patient**. Thus, combines the tuples based on the equality on *patient\_num* on both the relations.
5. Finally, project the *patient\_name*.

Hence, option-1 is **correct**.

In option-2, instead of natural join, Cartesian product has been applied. Since it combines all tuples from **doctor** with all the tuples from **operationRoster**, it is **wrong**.

In option-3, first natural join is applied between **doctor** and **operationRoster** based on equality on *doc\_id*. Then, again natural join is applied between the resultant

tuples and **patient** based on equality on *patient\_num*. Then, select the tuples having *doc\_name* = “Dr. Nath” and project the *patient\_name*.

The same natural join is again applied between **doctor**, **operationRoster** and **patient**. Then, select the tuples having *doc\_name* = “Dr. Joseph” and project the corresponding *patient\_name*.

Finally, apply union between two sets of tuples. Hence, the option-3 is **correct**.

In option-4, the predicate used for selection is:

$doc\_name = \text{“Dr. Nath”} \vee doc\_name = \text{“Dr. Joseph”}$

$\vee doctor.doc\_id = operationRoster.doc\_id$  which is **incorrect**.

The correct form of the predicate is:

$(doc\_name = \text{“Dr. Nath”} \vee doc\_name = \text{“Dr. Joseph”}) \wedge (doctor.doc\_id = operationRoster.doc\_id)$ .

7. Consider the E-R diagram given in Figure 3.

[MCQ: 2 points]

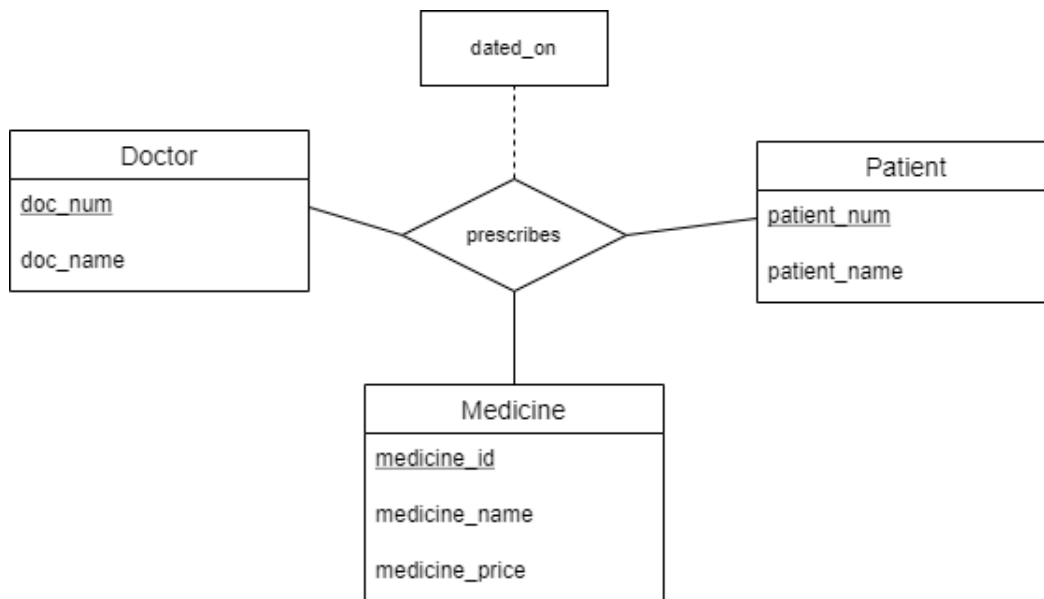


Figure 3: E-R diagram

What will be the schema for the tables corresponding to the relationship set **prescribes**?

- ☐ **prescribes**(*doc\_num*, *patient\_num*, *medicine\_id*)
- ☐ **prescribes**(*doc\_num*, *patient\_num*, *medicine\_id*, *dated\_on*)
- ☐ **prescribes**(*doc\_num*, *patient\_num*, *medicine\_id*)

✓ **prescribes**(doc\_num, patient\_num, medicine\_id, dated\_on)

**Solution:** In the given E-R diagram, there is a ternary relationship with many-to-many relations between the entity sets **Doctor**, **Patient** and **Medicine**. As in the case of binary relationships, the ternary relationship set **prescribes** must also be mapped to a table with attributes as follows:

- the primary keys from all the entity sets associated via the relationship set,
- any descriptive attribute of the relationship set.

Thus, the schema for **prescribes** is:

**prescribes**(doc\_num, patient\_num, medicine\_id, dated\_on).

Consider the E-R diagram given in Figure 4 and answer the questions 8 to 10.

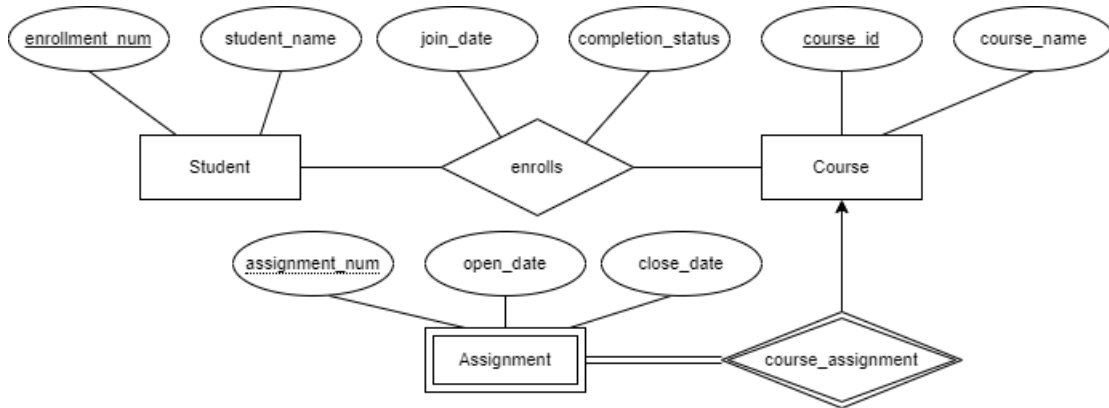


Figure 4: E-R diagram

8. Identify the correct relational schema for the relationship set **enrolls**.

[MCQ: 2 points]

Note: The primary key is underlined.

- ☐ **enrolls**(join\_date, completion\_status)
- ☐ **enrolls**(enrollment\_num, join\_date, completion\_status)
- ☐ **enrolls**(course\_id, enrollment\_num, join\_date, completion\_status)
- ☒ **enrolls**(course\_id, enrollment\_num, join\_date, completion\_status)

**Solution:** As the relationship is many-to-many, the schema for **enrolls** must have primary keys from the associated entity sets and the descriptive attributes of the relationship set. Hence, the right option is:

**enrolls** (course\_id, enrollment\_num, join\_date, completion\_status)

9. Identify the correct relational schema for the entity set **Assignment**.

[MCQ: 3 points]

Note: The primary key is underlined.

- ☐ **Assignment**(assignment\_num, open\_date, close\_date)
- ☒ **Assignment**(course\_id, assignment\_num, open\_date, close\_date)
- ☐ **Assignment**(assignment\_num, course\_id, open\_date, close\_date)
- ☐ **Assignment**(assignment\_num, course\_id, open\_date, close\_date)

**Solution:** Please note that **Assignment** is a weak entity which is identified by the strong entity **Course**. **Assignment** has total participation in the relationship and it is associated with **Course** via **course\_assignment** as a many-to-one relationship. Thus, the primary key of **Course** (one-side) entity set will be added to the relational schema for **Assignment** and it also becomes part of the primary key (cannot be null because of total participation). So the schema is:  
**Assignment** (course\_id, assignment\_num, open\_date, close\_date)

10. With reference to the relationship between **Student** and **Course**, which of the statement(s) is/are **TRUE**?

[ MSQ: 3 points]

- ☐ Each course must have at least one student.
- ☐ Each student must have enrolled for at least one course.
- ✓ ☒ Some courses may have no students.
- ✓ ☒ A student may enroll for many courses.

**Solution:** **enrolls** is a many-to-many relationship set between **Student** and **Course** entity sets.

As each course may be associated with 0 to  $n$  students, option-1 is wrong.

As each student can enroll from 0 to  $n$  courses, option-2 is also wrong.

However, option-3 and option-4 are correct.